

Maths - Year 2

Measurement 3: Introducing the £2 coin and the £5, £10 and £20 notes

Key Vocabulary

Pence (p), pound (£)	Units to measure amounts of money. 100p = £1.
Comparative language	More, less, fewer, most, least.
Total, altogether	The result of adding numbers or amounts together.
Change	How much money is left over after buying something.
Add	Combine two or more amounts to make a total.
Subtract	Taking one amount from another.
Double	Multiply a number or amount by 2.
Half	Divide into two equal parts.

Mathematical Skills

- Sort and identify coins correctly.
- Know the value of £1 and £2 coins in relation to each other and to £5, £10 and £20 notes.
- Make an amount of money, up to £10, using coins and notes.
- Give change from £1 and £2 coins, and £5 and £10 notes.
- Make any amount of money, using the fewest coins possible.
- Understand the notation for pounds (£) and pence (p).
- Use rounding to calculate the approximate total amount of small items.

Mathematical Methods

- Understanding the value of £1 and £2 coins.



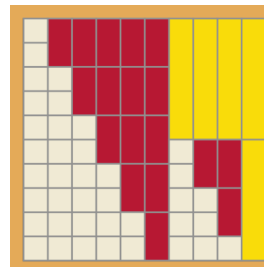
- Exchanging coins for notes.



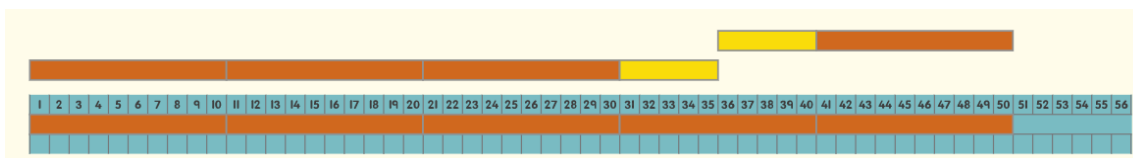
- Understanding the value of £5 and £10 notes e.g. exploring all the ways of making £10 using £1 and £2 coins, and £5 notes.

£5 + £5
 £5 + £2 + £2 + £1
 £5 + £2 + £1 + £1 + £1
 £5 + £1 + £1 + £1 + £1 + £1
 £2 + £2 + £2 + £2 + £2
 £2 + £2 + £2 + £2 + £1 + £1
 £2 + £2 + £2 + £1 + £1 + £1 + £1

£2 + £2 + £1 + £1 + £1 + £1 + £1 + £1
 £2 + £1 + £1 + £1 + £1 + £1 + £1 + £1 + £1
 £2 + £2 + £2 + £2 + £1 + £1
 £2 + £2 + £2 + £1 + £1 + £1 + £1
 £2 + £2 + £1 + £1 + £1 + £1 + £1 + £1
 £2 + £1 + £1 + £1 + £1 + £1 + £1 + £1 + £1
 £1 + £1 + £1 + £1 + £1 + £1 + £1 + £1 + £1 + £1



- Calculating change e.g. You want to buy a packet of biscuits from the leisure centre café. Packets of biscuits each cost 35p and the smallest amount of money you have is a 50p coin. How much change do you get?

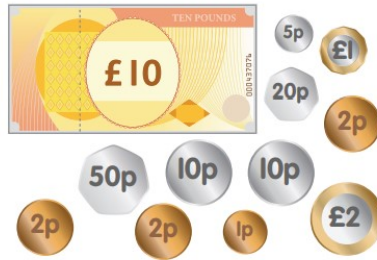


Can you..?

- How much money is this? Can you write the amount in pounds? Can you write the amount in pence?



- How much money is this? Can you write the amount in pounds? Can you write the amount in pence?



- Ben buys an orange, two apples and two bananas. How much change will he get from £1?

Orange Apple Banana



8p



17p



28p